









# Comparing Cents

Name: \_\_\_\_\_


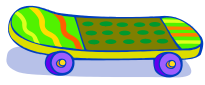


Jaime is having trouble comparing the prices of these items at the toy store because some have cent signs (¢) and some have dollar signs (\$). Help Jaime compare by filling in each circle with the correct symbol using any of the following three symbols:  $>$   $<$   $=$

1.       





50¢                      \$0.43                      \$0.45                      45¢

2.       

\$0.79                      27¢                      36¢                      \$0.51

3.       

\$0.89                      65¢                      \$0.87                      87¢

4.       

23¢                      \$0.42                      \$0.05                      10¢